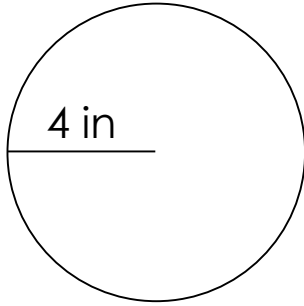


Area and circumference of a circle

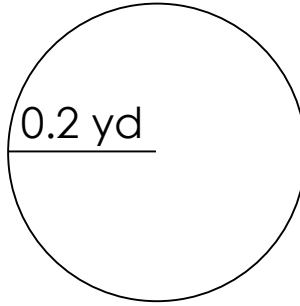
Grade 6 Geometry Worksheet

Find the area and circumference of each circle.

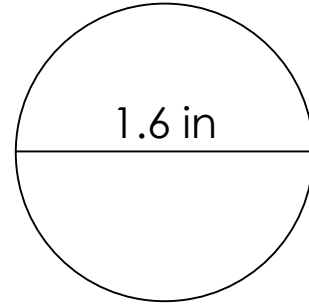
1)



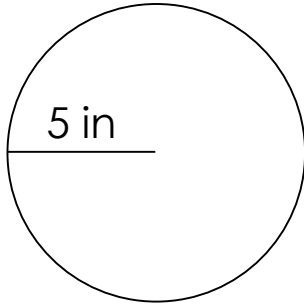
2)



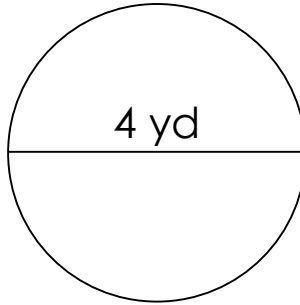
3)



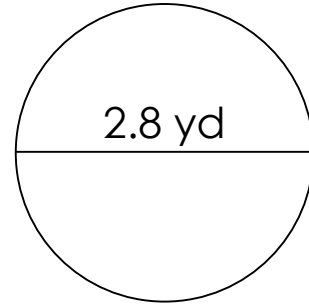
4)



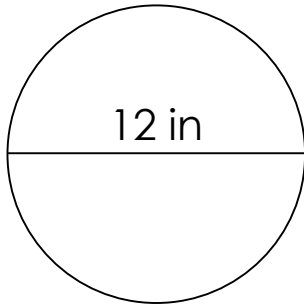
5)



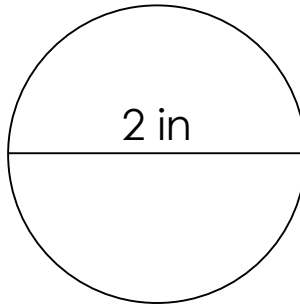
6)



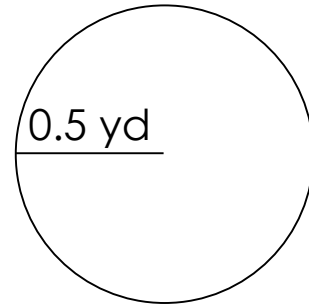
7)



8)



9)

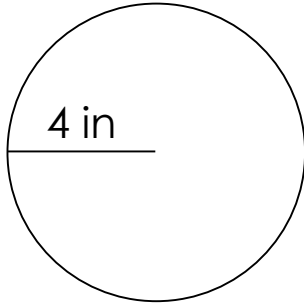


Area and circumference of a circle

Grade 6 Geometry Worksheet

Find the area and circumference of each circle.

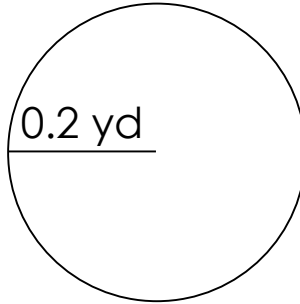
1)



$$C=25.12 \text{ in}$$

$$A=50.24 \text{ in}^2$$

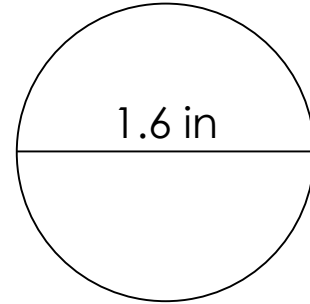
2)



$$C=1.256 \text{ yd}$$

$$A=0.1256 \text{ yd}^2$$

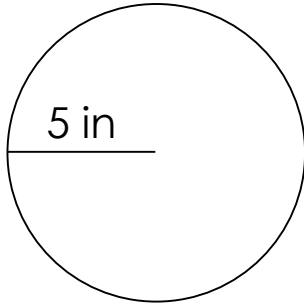
3)



$$C=5.024 \text{ in}$$

$$A=2.0096 \text{ in}^2$$

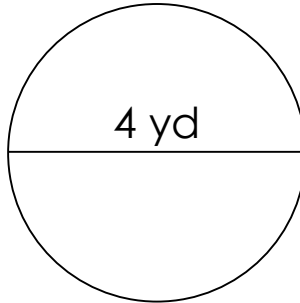
4)



$$C=31.40 \text{ in}$$

$$A=78.50 \text{ in}^2$$

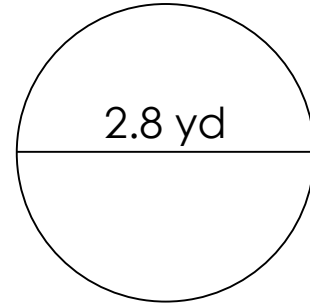
5)



$$C=12.56 \text{ yd}$$

$$A=12.56 \text{ yd}^2$$

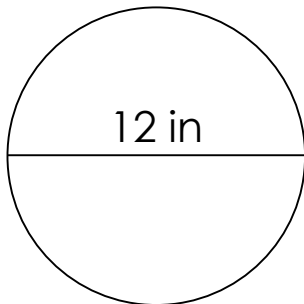
6)



$$C=8.792 \text{ yd}$$

$$A=6.1544 \text{ yd}^2$$

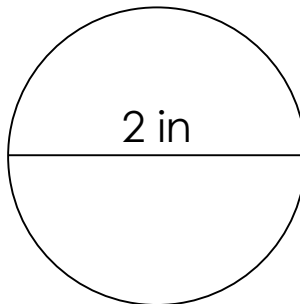
7)



$$C=37.68 \text{ in}$$

$$A=113.04 \text{ in}^2$$

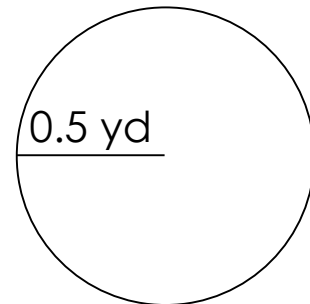
8)



$$C=6.28 \text{ in}$$

$$A=3.14 \text{ in}^2$$

9)



$$C=3.140 \text{ yd}$$

$$A=0.7850 \text{ yd}^2$$