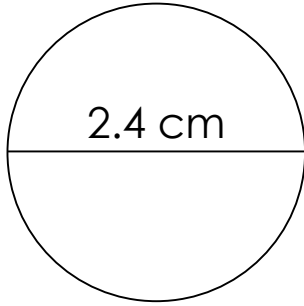


Circumference of a circle

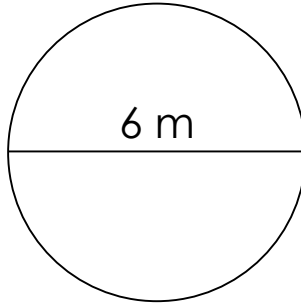
Grade 6 Geometry Worksheet

Calculate the circumference of each circle.

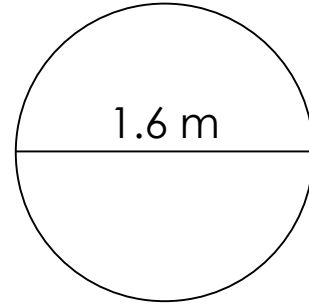
1)



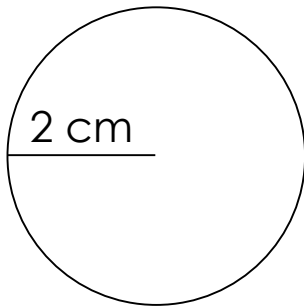
2)



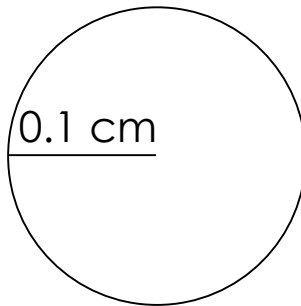
3)



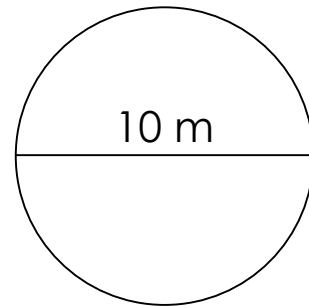
4)



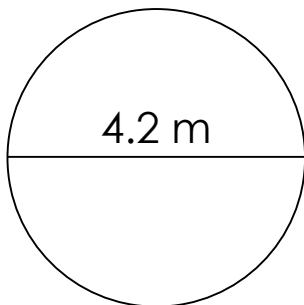
5)



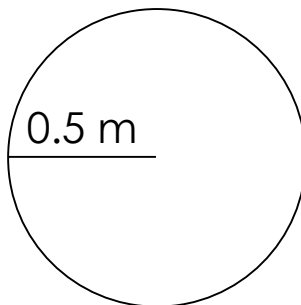
6)



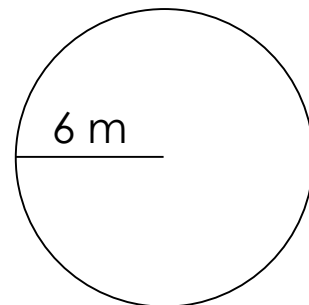
7)



8)



9)

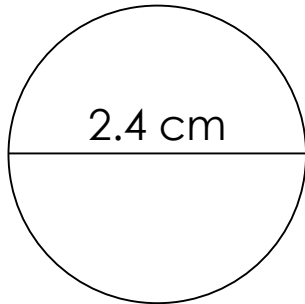


Circumference of a circle

Grade 6 Geometry Worksheet

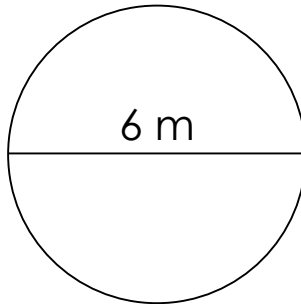
Calculate the circumference of each circle.

1)



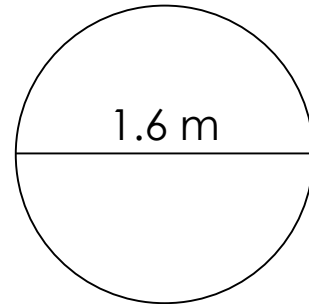
$C=7.536 \text{ cm}$

2)



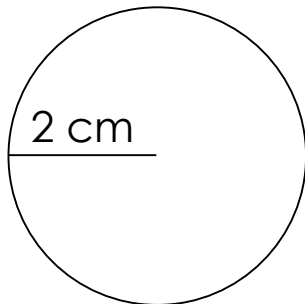
$C=18.84 \text{ m}$

3)



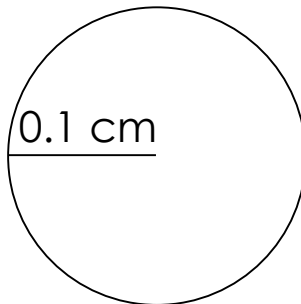
$C=5.024 \text{ m}$

4)



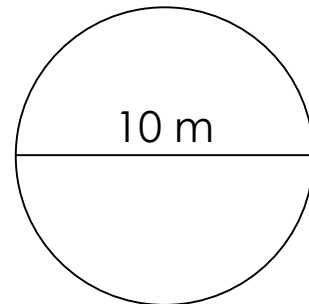
$C=12.56 \text{ cm}$

5)



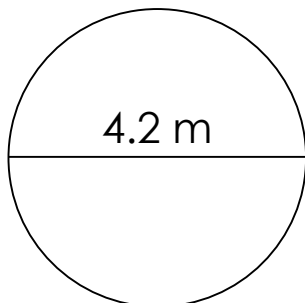
$C=0.628 \text{ cm}$

6)



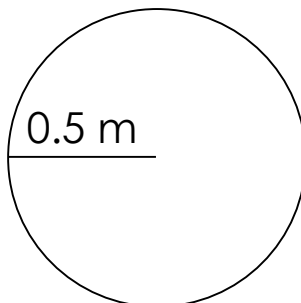
$C=31.40 \text{ m}$

7)



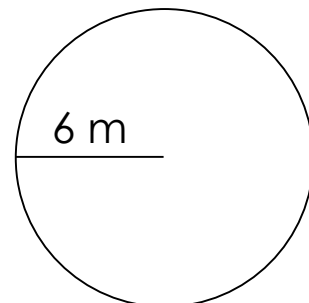
$C=13.188 \text{ m}$

8)



$C=3.140 \text{ m}$

9)



$C=37.68 \text{ m}$