

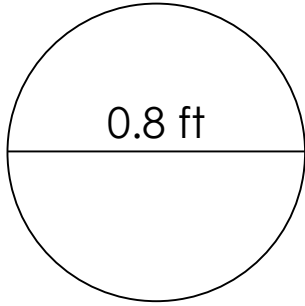
# Circumference of a circle

---

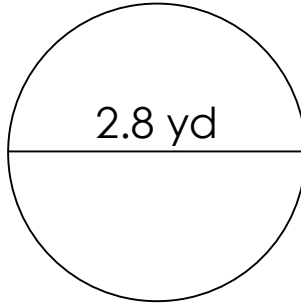
## Grade 6 Geometry Worksheet

Calculate the circumference of each circle.

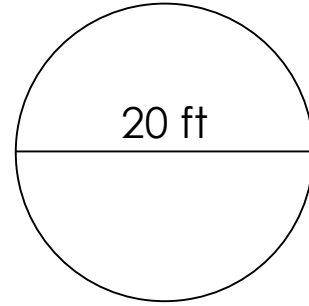
1)



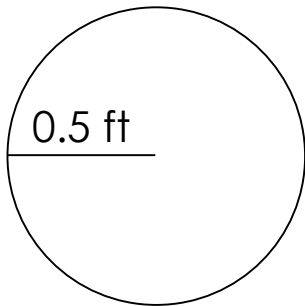
2)



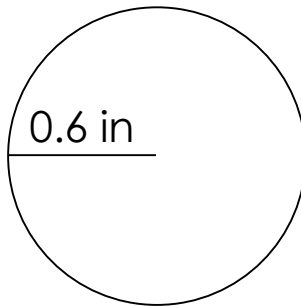
3)



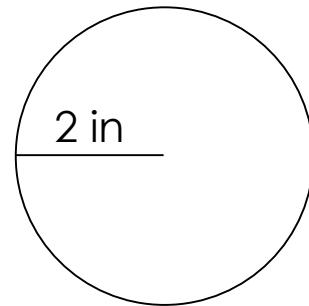
4)



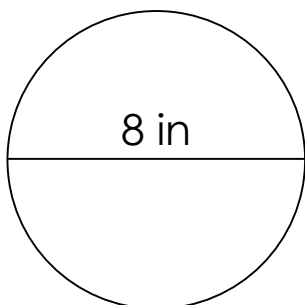
5)



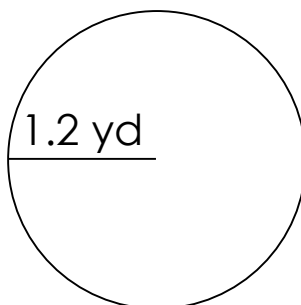
6)



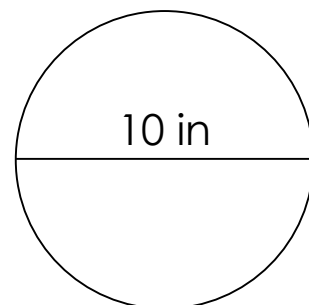
7)



8)



9)

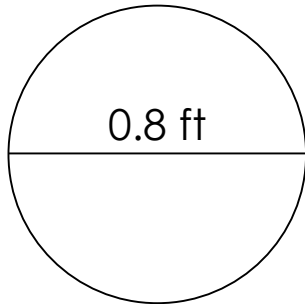


## Circumference of a circle

### Grade 6 Geometry Worksheet

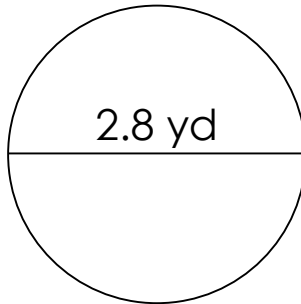
Calculate the circumference of each circle.

1)



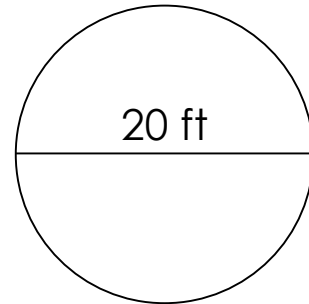
$C=2.512 \text{ ft}$

2)



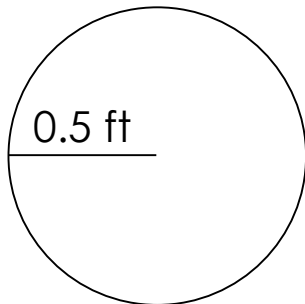
$C=8.792 \text{ yd}$

3)



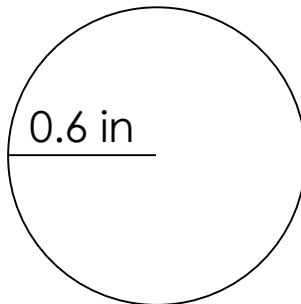
$C=62.80 \text{ ft}$

4)



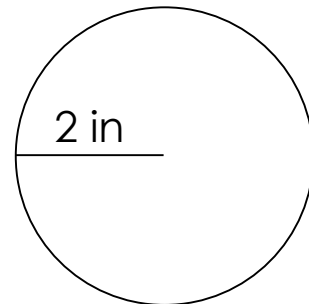
$C=3.140 \text{ ft}$

5)



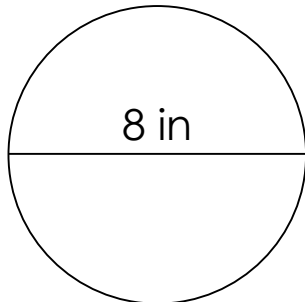
$C=3.768 \text{ in}$

6)



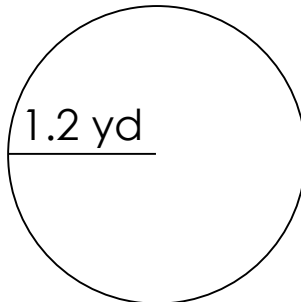
$C=12.56 \text{ in}$

7)



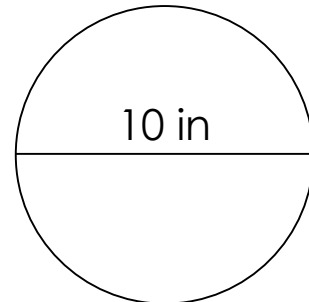
$C=25.12 \text{ in}$

8)



$C=7.536 \text{ yd}$

9)



$C=31.40 \text{ in}$