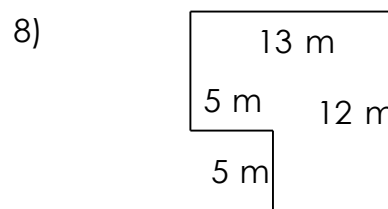
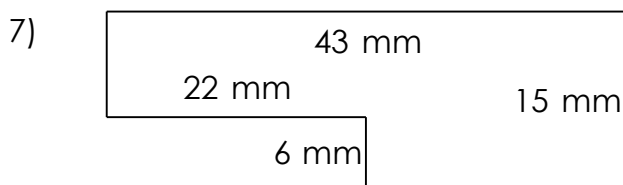
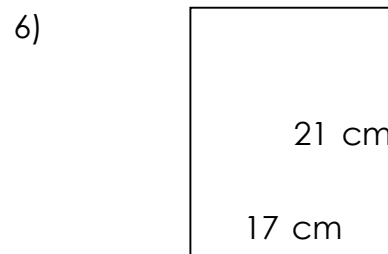
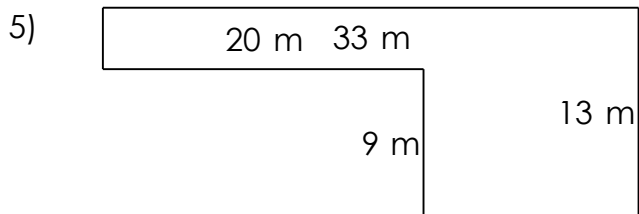
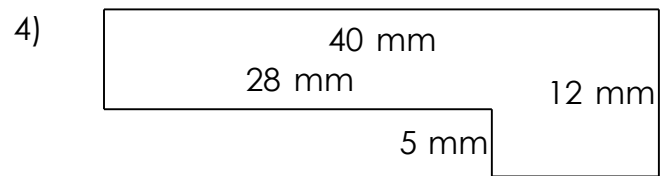
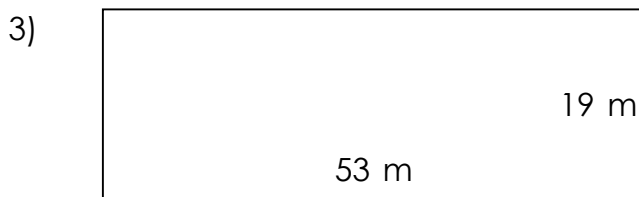



Rectangular shapes - area and perimeter

Grade 5 Geometry Worksheet

Find the perimeter and area of each rectangular shape.




Rectangular shapes - area and perimeter

Grade 5 Geometry Worksheet


Find the perimeter and area of each rectangular shape.



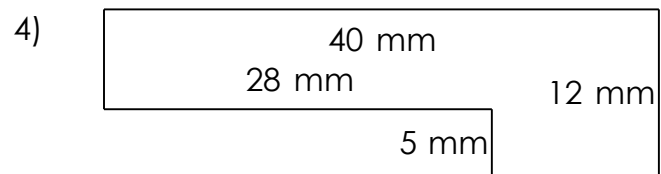
$P = 74 \text{ m}$ $A = 252 \text{ m}^2$



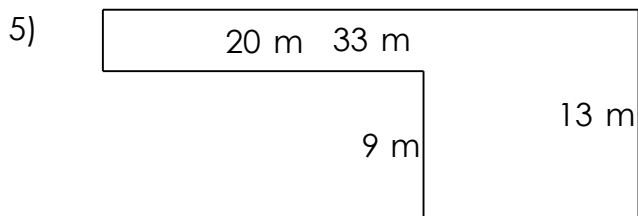
$P = 86 \text{ m}$ $A = 280 \text{ m}^2$



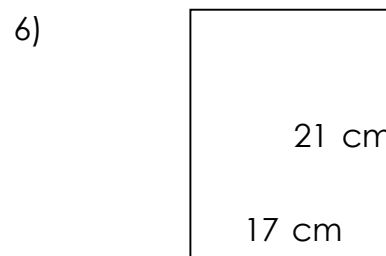
$P = 144 \text{ m}$ $A = 1,007 \text{ m}^2$



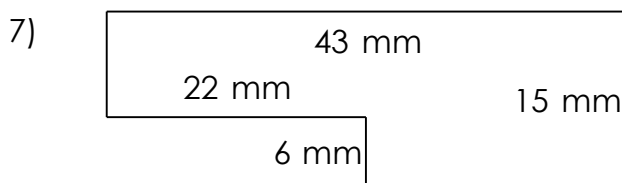
$P = 104 \text{ mm}$ $A = 340 \text{ mm}^2$



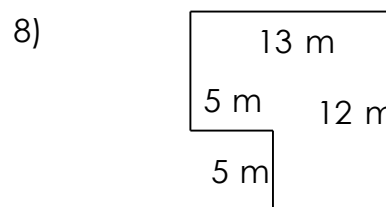
$P = 92 \text{ m}$ $A = 249 \text{ m}^2$



$P = 76 \text{ cm}$ $A = 357 \text{ cm}^2$



$P = 116 \text{ mm}$ $A = 513 \text{ mm}^2$



$P = 50 \text{ m}$ $A = 131 \text{ m}^2$
