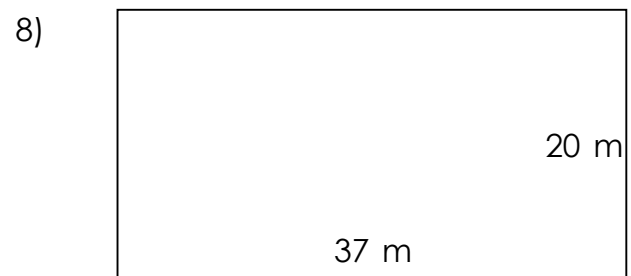
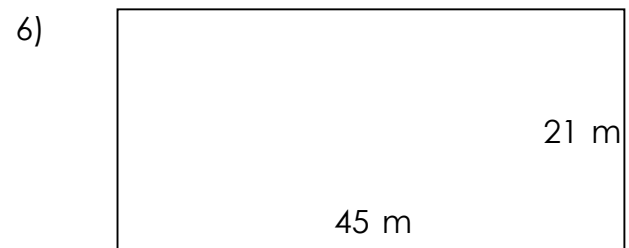
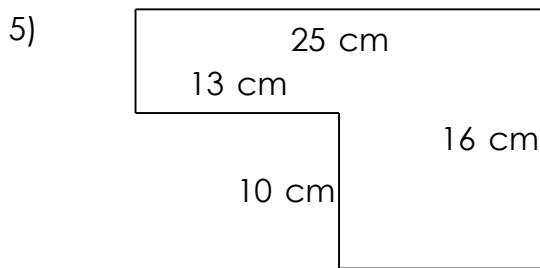
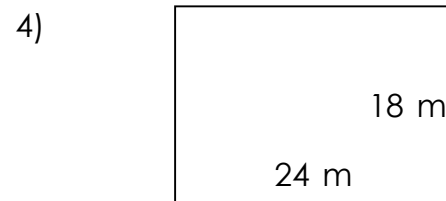
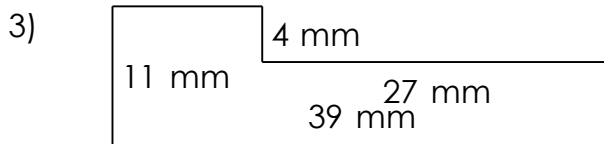
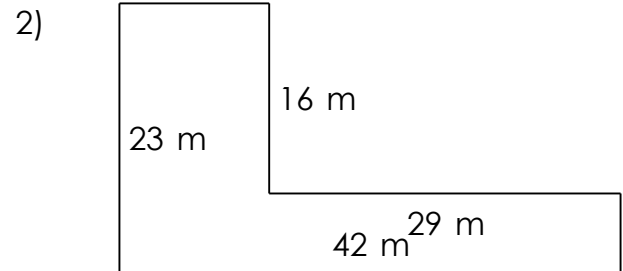
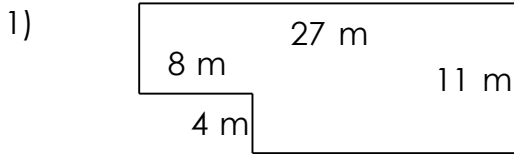


Rectangular shapes - area and perimeter

Grade 5 Geometry Worksheet

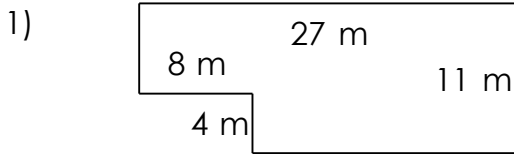
Find the perimeter and area of each rectangular shape.



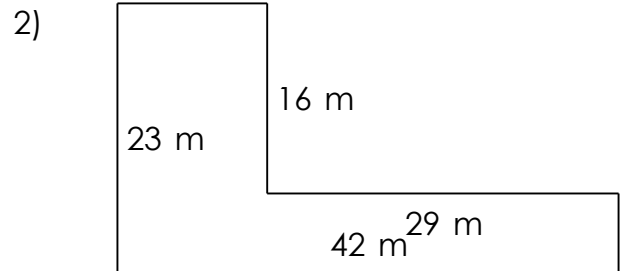
Rectangular shapes - area and perimeter

Grade 5 Geometry Worksheet

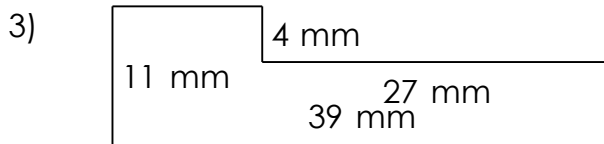
Find the perimeter and area of each rectangular shape.



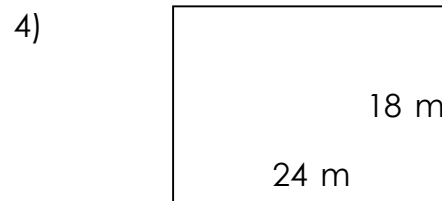
$P = 76 \text{ m}$ $A = 265 \text{ m}^2$



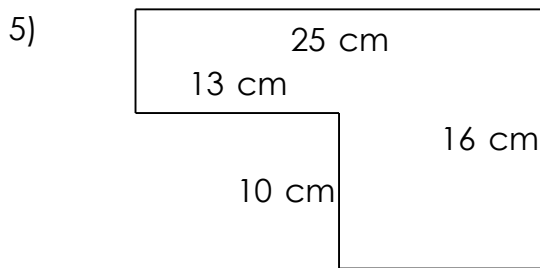
$P = 130 \text{ m}$ $A = 502 \text{ m}^2$



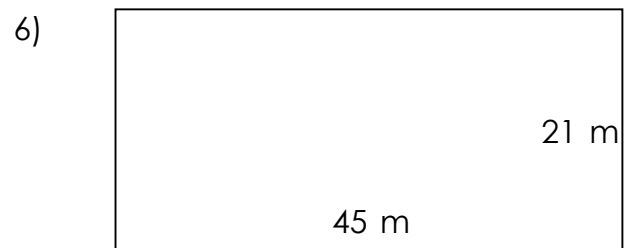
$P = 100 \text{ mm}$ $A = 321 \text{ mm}^2$



$P = 84 \text{ m}$ $A = 432 \text{ m}^2$



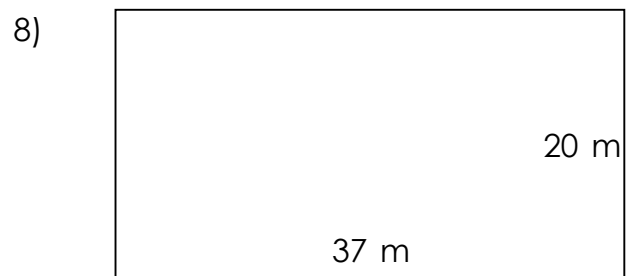
$P = 82 \text{ cm}$ $A = 270 \text{ cm}^2$



$P = 132 \text{ m}$ $A = 945 \text{ m}^2$



$P = 64 \text{ cm}$ $A = 231 \text{ cm}^2$



$P = 114 \text{ m}$ $A = 740 \text{ m}^2$