

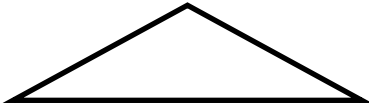
Classifying triangles

Grade 5 Geometry Worksheet

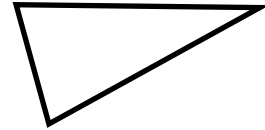
On each triangle, mark all equal sides or equal angles.

Then, classify each triangle as **equilateral**, **isosceles**, **scalene** or **right**.

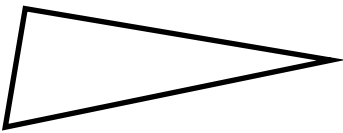
1)



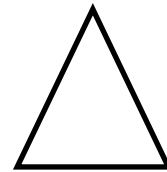
2)



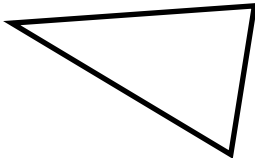
3)



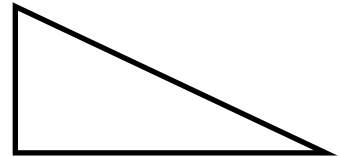
4)




5)




6)



7)

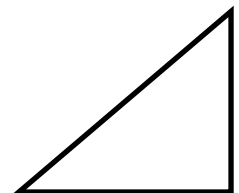


8)



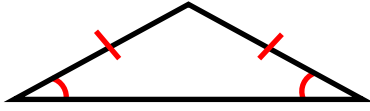
Measure each angle of the triangle and label the triangle.

What type of triangle is it? Explain.



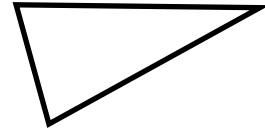
Answers

1)



Isosceles triangle

2)



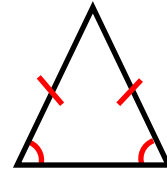
Scalene triangle

3)



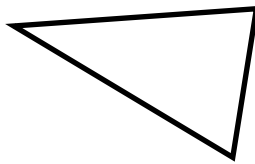
Right triangle

4)



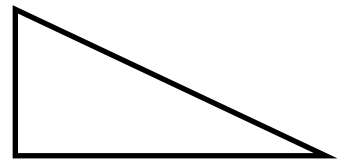
Isosceles triangle

5)



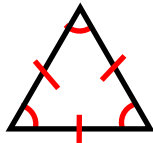
Scalene triangle

6)




Right triangle

7)



Equilateral triangle

8)

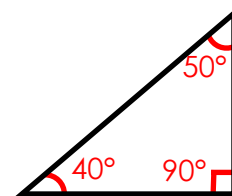


Scalene triangle

Measure each angle of the triangle and label the triangle.

What type of triangle is it? Explain.

It is a right triangle because it has one 90-degree angle.



right triangle