

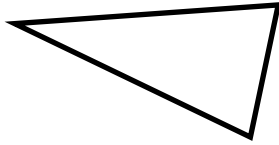
Classifying triangles

Grade 5 Geometry Worksheet

On each triangle, mark all equal sides or equal angles.

Then, classify each triangle as **equilateral**, **isosceles**, **scalene** or **right**.

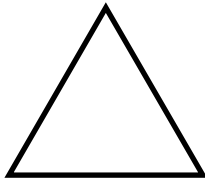
1)



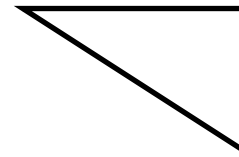
2)



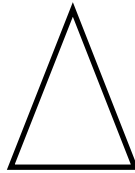
3)



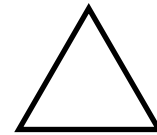
4)



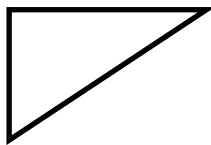
5)



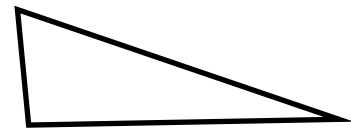
6)



7)

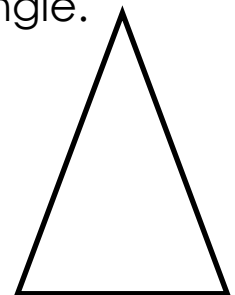


8)



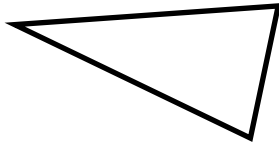
Measure each angle of the triangle and label the triangle.

What type of triangle is it? Explain.



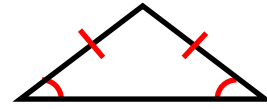
Answers

1)



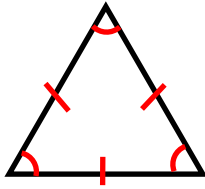
Scalene triangle

2)



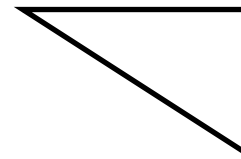
Isosceles triangle

3)



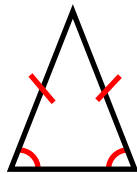
Equilateral triangle

4)



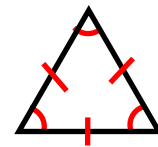
Right triangle

5)



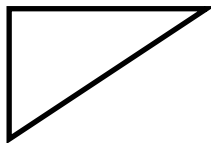
Isosceles triangle

6)



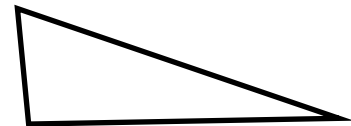
Equilateral triangle

7)



Right triangle

8)

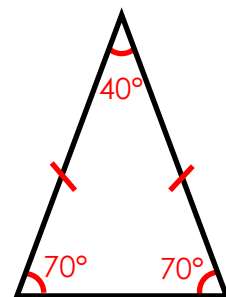


Scalene triangle

Measure each angle of the triangle and label the triangle.

What type of triangle is it? Explain.

It is an isosceles triangle because two sides have the same length, and it has two congruent angles.



isosceles triangle