


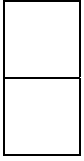
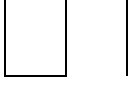
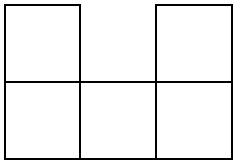
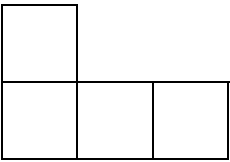
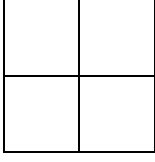

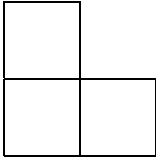



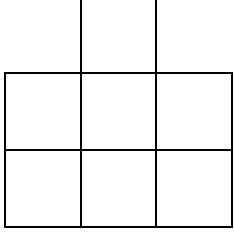

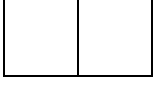
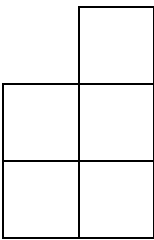
Identifying views of 3-D models

Grade 5 Geometry Worksheet

Check the boxes with the correct views.
(You might need to check more than one box.)

	<input checked="" type="checkbox"/> Front view 	<input type="checkbox"/> Left view 	<input type="checkbox"/> Right view
	<input type="checkbox"/> Front view 	<input type="checkbox"/> Back view 	<input type="checkbox"/> Left view
	<input type="checkbox"/> Front view 	<input type="checkbox"/> Left view 	<input type="checkbox"/> Right view
	<input type="checkbox"/> Left view 	<input type="checkbox"/> Right view 	<input type="checkbox"/> Back view
	<input type="checkbox"/> Left view 	<input type="checkbox"/> Left view 	<input type="checkbox"/> Right view

Answers

<p style="text-align: center;">Back</p> <table border="1" style="width: 100%; text-align: center;"> <tr><td> </td><td> </td><td> </td></tr> <tr><td> </td><td> </td><td> </td></tr> <tr><td>1</td><td>2</td><td>2</td></tr> </table> <p style="text-align: center;">Front</p> <p style="text-align: center;">Left Right</p>							1	2	2	<p><input checked="" type="checkbox"/> Front view</p> 	<p><input type="checkbox"/> Left view</p> 	<p><input type="checkbox"/> Right view</p> 
1	2	2										
<p style="text-align: center;">Back</p> <table border="1" style="width: 100%; text-align: center;"> <tr><td> </td><td> </td><td> </td></tr> <tr><td>2</td><td>1</td><td>1</td></tr> <tr><td>2</td><td>1</td><td>2</td></tr> </table> <p style="text-align: center;">Front</p> <p style="text-align: center;">Left Right</p>				2	1	1	2	1	2	<p><input checked="" type="checkbox"/> Front view</p> 	<p><input type="checkbox"/> Back view</p> <p>view</p> 	<p><input checked="" type="checkbox"/> Left view</p> 
2	1	1										
2	1	2										
<p style="text-align: center;">Back</p> <table border="1" style="width: 100%; text-align: center;"> <tr><td> </td><td> </td><td> </td></tr> <tr><td>1</td><td>1</td><td>1</td></tr> <tr><td>2</td><td>1</td><td>1</td></tr> </table> <p style="text-align: center;">Front</p> <p style="text-align: center;">Left Right</p>				1	1	1	2	1	1	<p><input type="checkbox"/> Front view</p> 	<p><input type="checkbox"/> Left view</p> 	<p><input checked="" type="checkbox"/> Right view</p> 
1	1	1										
2	1	1										
<p style="text-align: center;">Back</p> <table border="1" style="width: 100%; text-align: center;"> <tr><td> </td><td>3</td><td> </td></tr> <tr><td>2</td><td>1</td><td>2</td></tr> <tr><td>1</td><td>1</td><td> </td></tr> </table> <p style="text-align: center;">Front</p> <p style="text-align: center;">Left Right</p>		3		2	1	2	1	1		<p><input type="checkbox"/> Left view</p> 	<p><input checked="" type="checkbox"/> Right view</p> 	<p><input checked="" type="checkbox"/> Back view</p> 
	3											
2	1	2										
1	1											
<p style="text-align: center;">Back</p> <table border="1" style="width: 100%; text-align: center;"> <tr><td> </td><td> </td><td> </td></tr> <tr><td>1</td><td>3</td><td>1</td></tr> <tr><td>1</td><td>1</td><td>2</td></tr> </table> <p style="text-align: center;">Front</p> <p style="text-align: center;">Left Right</p>				1	3	1	1	1	2	<p><input checked="" type="checkbox"/> Left view</p> 	<p><input type="checkbox"/> Left view</p> 	<p><input checked="" type="checkbox"/> Right view</p> 
1	3	1										
1	1	2										