

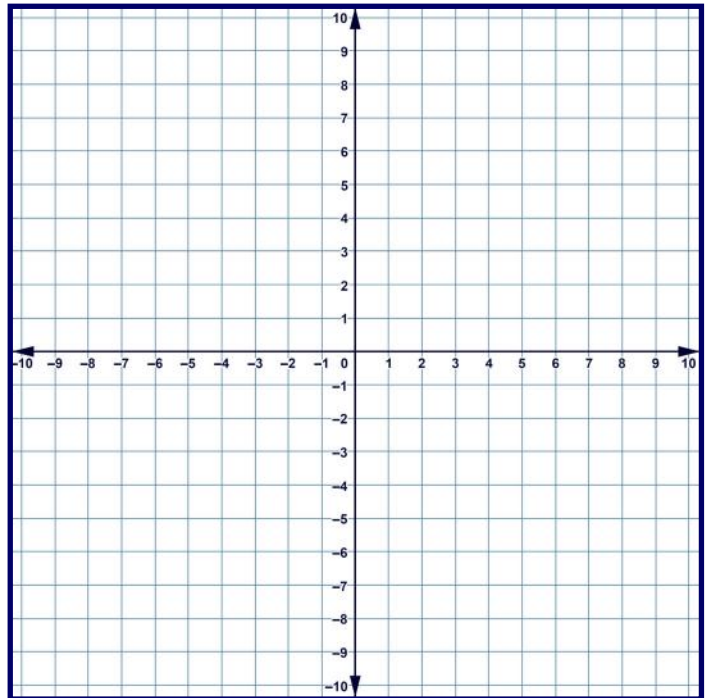
# Function tables and the coordinate plane

## Grade 5 Geometry Worksheet

Complete the table below. Write the corresponding ordered pairs and plot them on the coordinate plane.

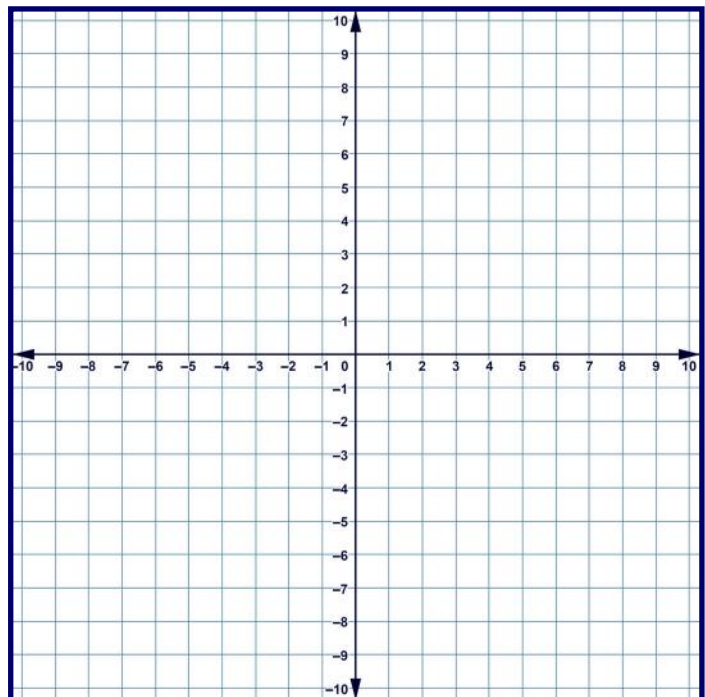
Rule:  $y = 2 - x$

x	y	Ordered Pairs
-2		(____, ____)
-1		
0		
1		
2		



Rule:  $y = 3x$

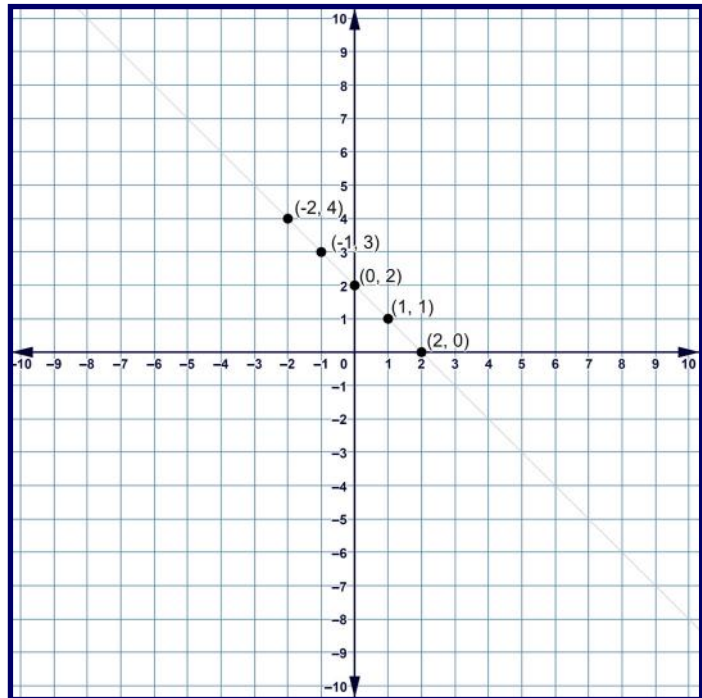
x	y	Ordered Pairs
-2		(____, ____)
-1		
0		
1		
2		



## Answer

Rule:  $y = 2 - x$

x	y	Ordered Pairs
-2	4	(-2,4)
-1	3	(-1,3)
0	2	(0,2)
1	1	(1,1)
2	0	(2,0)



Rule:  $y = 3x$

x	y	Ordered Pairs
-2	-6	(-2,-6)
-1	-3	(-1,-3)
0	0	(0,0)
1	3	(1,3)
2	6	(2,6)

