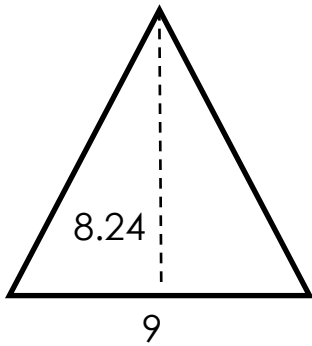


Area of triangles, parallelograms and trapezoids

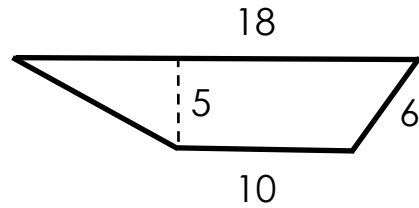
Grade 5 Geometry Worksheet

All dimensions shown are centimeters.
Find the areas in square centimeters.

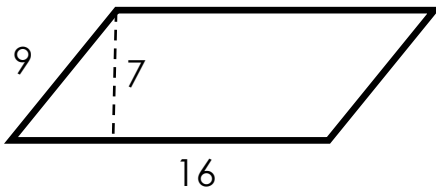
1)



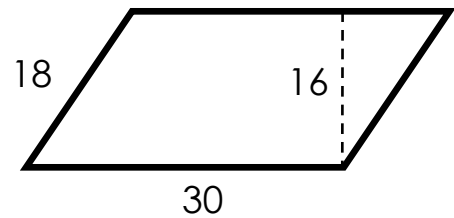
2)



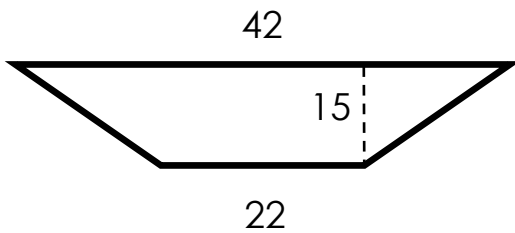
3)



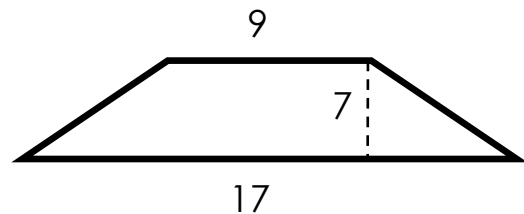
4)



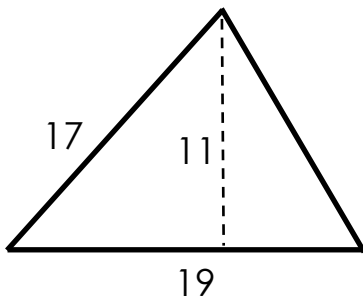
5)



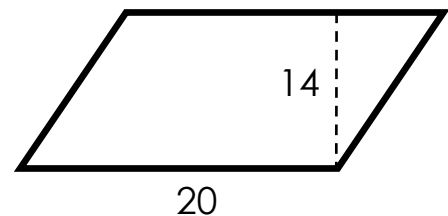
6)



7)



8)



Answers

1) 37.08 cm^2

2) 70 cm^2

3) 112 cm^2

4) 480 cm^2

5) 480 cm^2

6) 91 cm^2

7) 104.5 cm^2

8) 280 cm^2