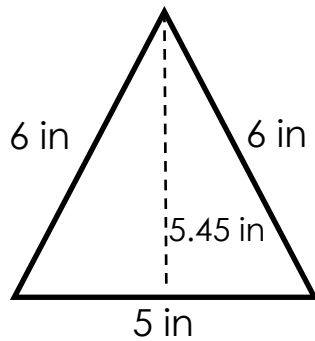


Area of isosceles and right triangles

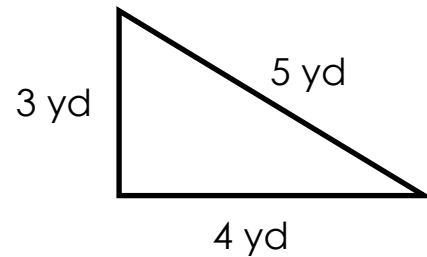
Grade 5 Geometry Worksheet

Find the area of each triangle.

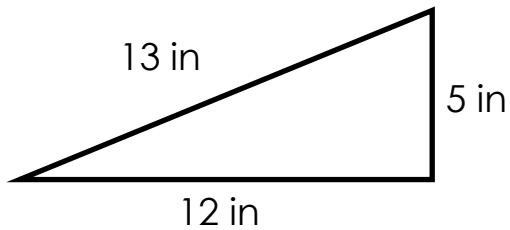
1)



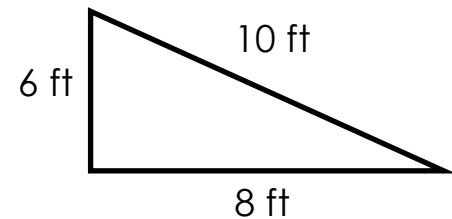
2)



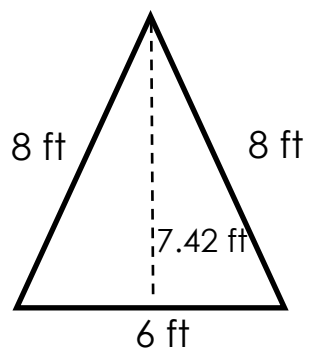
3)



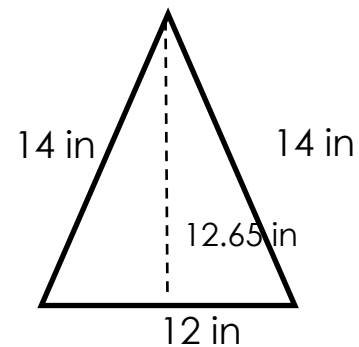
4)



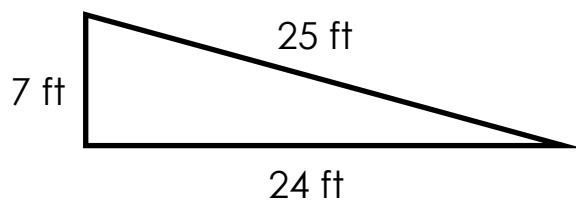
5)



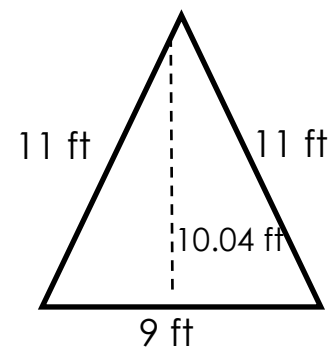
6)



7)



8)



Answers

1) 13.63 in^2

3) 30 in^2

5) 22.26 ft^2

7) 84 ft^2

2) 6 yd^2

4) 24 ft^2

6) 75.9 in^2

8) 45.18 ft^2