



Angles of rotational symmetry

Grade 4 Geometry Worksheet


Write the angles at which each shape displays rotational symmetry.



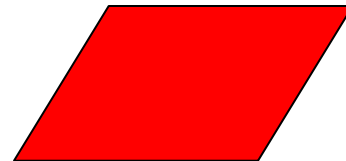
Angle(s) of rotational symmetry:



Angle(s) of rotational symmetry:



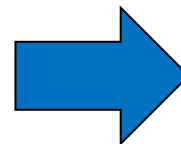
Angle(s) of rotational symmetry:




Angle(s) of rotational symmetry:



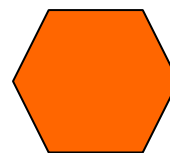
Angle(s) of rotational symmetry:



Angle(s) of rotational symmetry:




Angle(s) of rotational symmetry:




Angle(s) of rotational symmetry:

Answers




Angle(s) of rotational symmetry:

90°, 180°, 270°



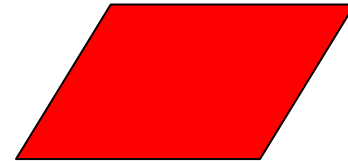
Angle(s) of rotational symmetry:

180°




Angle(s) of rotational symmetry:

none



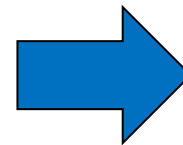
Angle(s) of rotational symmetry:

180°




Angle(s) of rotational symmetry:

none



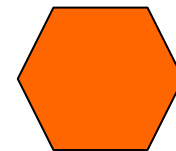
Angle(s) of rotational symmetry:

none



Angle(s) of rotational symmetry:

90°, 180°, 270°



Angle(s) of rotational symmetry:

60°, 120°, 180°, 240°, 300°