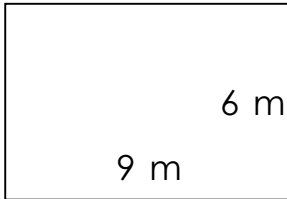


Rectangles - area and perimeter (metric)

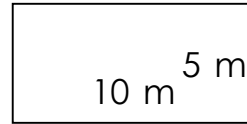
Grade 4 Geometry Worksheet

Find the perimeter and area of each rectangle.

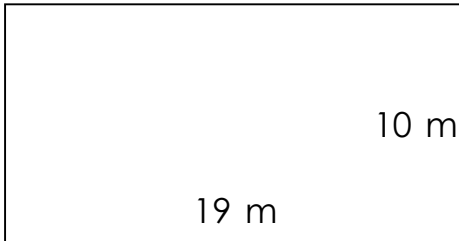
1)



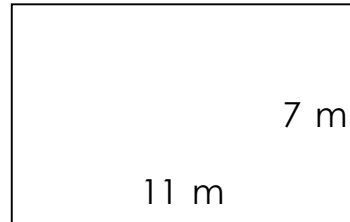
2)



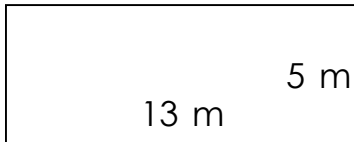
3)



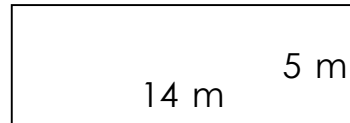
4)



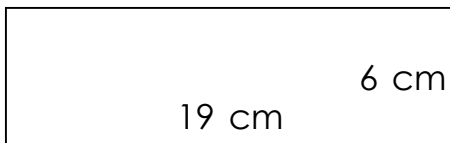
5)



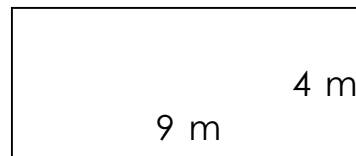
6)



7)



8)

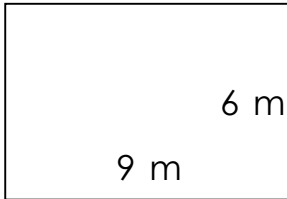


Rectangles - area and perimeter (metric)

Grade 4 Geometry Worksheet

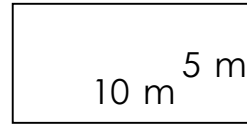
Find the perimeter and area of each rectangle.

1)



$$P = 30 \text{ m} \quad A = 54 \text{ m}^2$$

2)



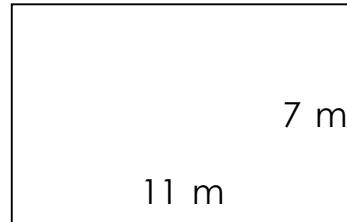
$$P = 30 \text{ m} \quad A = 50 \text{ m}^2$$

3)



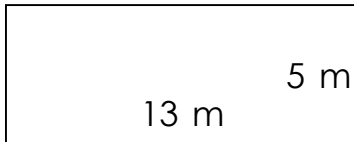
$$P = 58 \text{ m} \quad A = 190 \text{ m}^2$$

4)



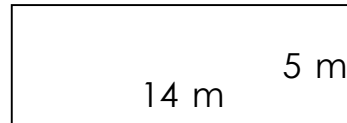
$$P = 36 \text{ m} \quad A = 77 \text{ m}^2$$

5)



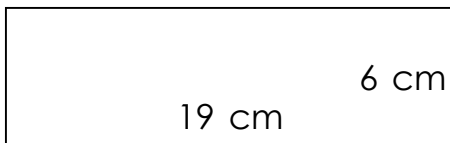
$$P = 36 \text{ m} \quad A = 65 \text{ m}^2$$

6)



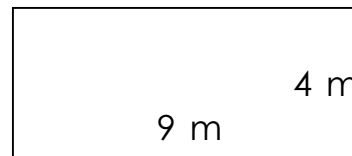
$$P = 38 \text{ m} \quad A = 70 \text{ m}^2$$

7)



$$P = 50 \text{ cm} \quad A = 114 \text{ cm}^2$$

8)



$$P = 26 \text{ m} \quad A = 36 \text{ m}^2$$