
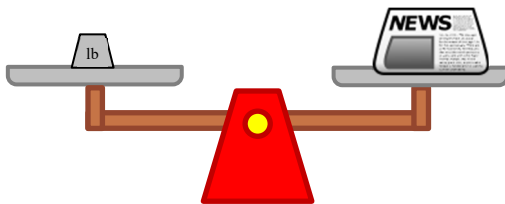


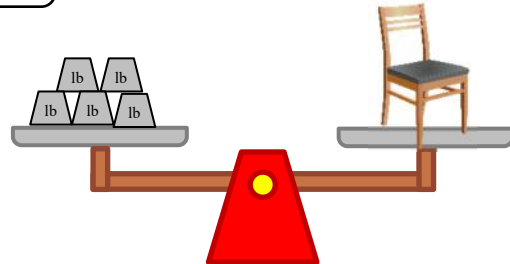
Measure weights in pounds

Grade 2 Measurement Worksheet

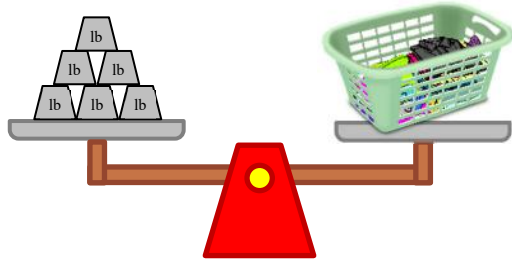
 = 1 pound



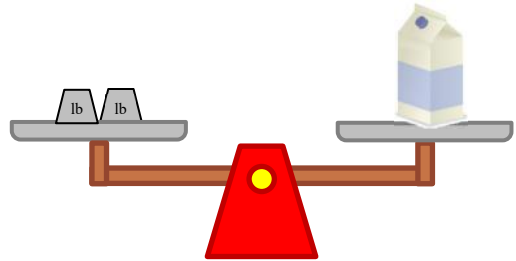
The newspaper weighs _____ pound.



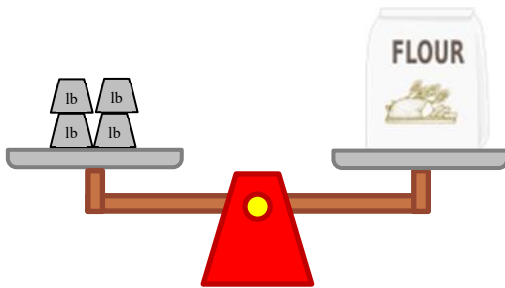
The chair weighs _____ pounds.



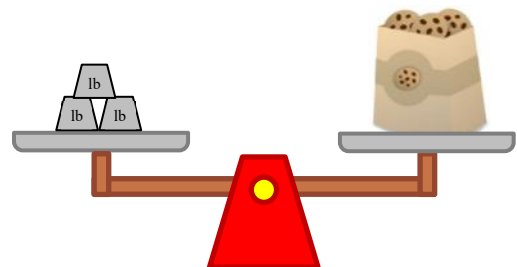
The laundry weighs _____ pounds.



The milk carton weighs _____ pounds.



The bag of flour weighs _____ pounds.



The bag of cookies weighs _____ pounds.

How much heavier is the laundry than the newspaper? _____

How much heavier is the chair than the bag of flour? _____

Answers

The newspaper weighs **1** pound.

The chair weighs **5** pounds.

The laundry weighs **6** pounds.

The milk carton weighs **2** pounds.

The bag of flour weighs **4** pounds.

The bag of cookies weighs **3** pounds.

How much heavier is the laundry than the newspaper?

5 pounds

How much heavier is the chair than the bag of flour?

1 pound