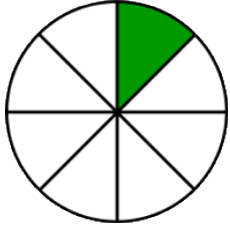
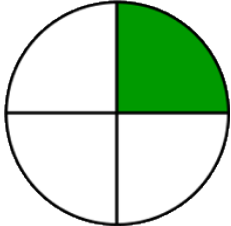
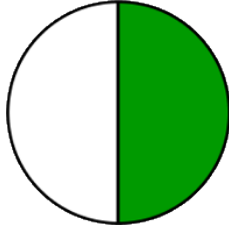
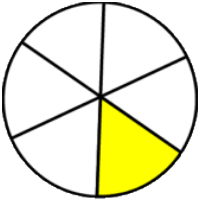
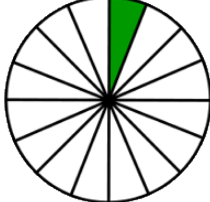
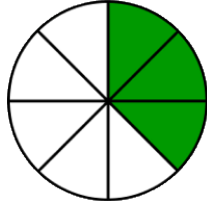
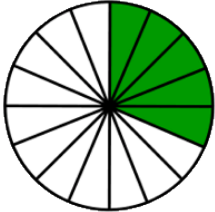
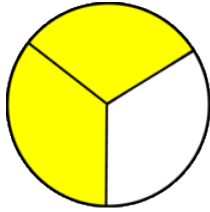
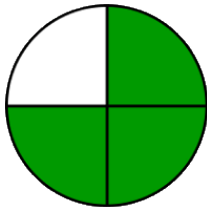
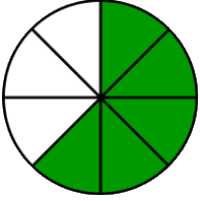
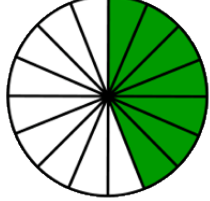



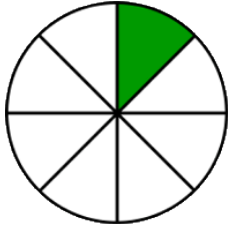
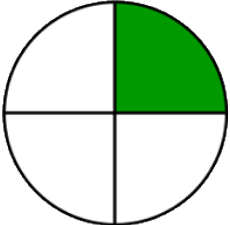
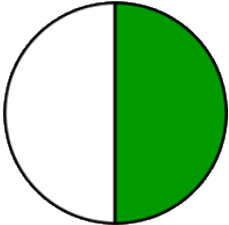
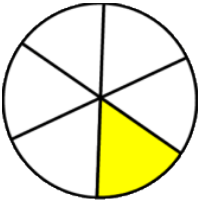

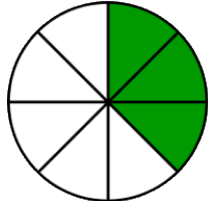

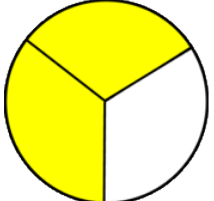
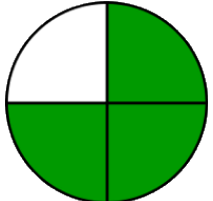
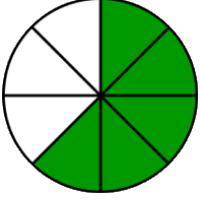
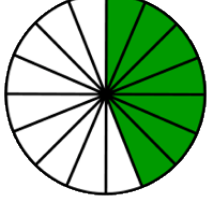

## Identify fractions

### Grade 2 Fractions Worksheet

What fraction of the shape is shaded? Circle the correct answer.

		
$\frac{1}{6}$ $\frac{8}{1}$ $\frac{1}{8}$	$\frac{4}{1}$ $\frac{1}{8}$ $\frac{1}{4}$	$\frac{1}{2}$ $\frac{1}{6}$ $\frac{1}{4}$
		
$\frac{1}{6}$ $\frac{6}{1}$ $\frac{1}{4}$	$\frac{1}{16}$ $\frac{1}{8}$ $\frac{16}{1}$	$\frac{3}{6}$ $\frac{3}{8}$ $\frac{3}{4}$
		
$\frac{5}{16}$ $\frac{16}{5}$ $\frac{5}{8}$	$\frac{3}{2}$ $\frac{2}{3}$ $\frac{2}{4}$	$\frac{3}{2}$ $\frac{3}{4}$ $\frac{4}{3}$
		
$\frac{5}{16}$ $\frac{8}{5}$ $\frac{5}{8}$	$\frac{7}{8}$ $\frac{7}{16}$ $\frac{16}{7}$	$\frac{8}{7}$ $\frac{7}{16}$ $\frac{7}{8}$

## Answers

		
$\frac{1}{8}$	$\frac{1}{4}$	$\frac{1}{2}$
		
$\frac{1}{6}$	$\frac{1}{16}$	$\frac{3}{8}$
		
$\frac{5}{16}$	$\frac{2}{3}$	$\frac{3}{4}$
		
$\frac{5}{8}$	$\frac{7}{16}$	$\frac{7}{8}$