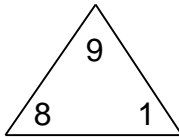


# Fact families

## Grade 2 Subtraction Worksheet

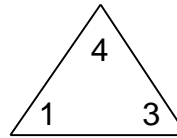
Complete each family of facts.

1.



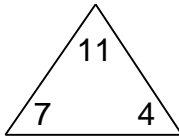
$$\begin{array}{r} \square + \square = \square \\ \square + \square = \square \\ \square - \square = \square \\ \square - \square = \square \end{array}$$

2.



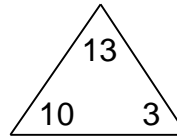
$$\begin{array}{r} \square + \square = \square \\ \square + \square = \square \\ \square - \square = \square \\ \square - \square = \square \end{array}$$

3.



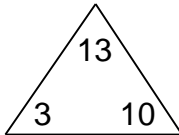
$$\begin{array}{r} \square + \square = \square \\ \square + \square = \square \\ \square - \square = \square \\ \square - \square = \square \end{array}$$

4.



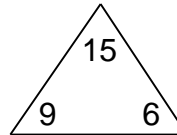
$$\begin{array}{r} \square + \square = \square \\ \square + \square = \square \\ \square - \square = \square \\ \square - \square = \square \end{array}$$

5.



$$\begin{array}{r} \square + \square = \square \\ \square + \square = \square \\ \square - \square = \square \\ \square - \square = \square \end{array}$$

6.



$$\begin{array}{r} \square + \square = \square \\ \square + \square = \square \\ \square - \square = \square \\ \square - \square = \square \end{array}$$

# Fact families

## Grade 2 Subtraction Worksheet

Complete each family of facts.

1.

9		
8	1	

8	+	1	=	9
1	+	8	=	9
9	-	8	=	1
9	-	1	=	8

2.

4		
1	3	

1	+	3	=	4
3	+	1	=	4
4	-	1	=	3
4	-	3	=	1

3.

11		
7	4	

7	+	4	=	11
4	+	7	=	11
11	-	7	=	4
11	-	4	=	7

4.

13		
10	3	

10	+	3	=	13
3	+	10	=	13
13	-	10	=	3
13	-	3	=	10

5.

13		
3	10	

3	+	10	=	13
10	+	3	=	13
13	-	3	=	10
13	-	10	=	3

6.

15		
9	6	

9	+	6	=	15
6	+	9	=	15
15	-	9	=	6
15	-	6	=	9