


Telling time - whole hours (draw the clock)

Grade 1 Time Worksheet


Draw the time shown on each clock.

1.




5:00

2.




3:00

3.




7:00

4.




10:00

5.




2:00

6.




9:00

7.




11:00

8.



6:00

9.




1:00

Telling time - whole hours (draw the clock)

Grade 1 Time Worksheet


Draw the time shown on each clock.

1.




5:00

2.




3:00

3.




7:00

4.




10:00

5.




2:00

6.




9:00

7.




11:00

8.



6:00

9.



1:00