





Subtraction using pictures (up to 20)

Grade 1 Subtraction Worksheet

It's a busy day at Jane's Bakery!

Fill in the blanks according to the pictures. Then, complete the number sentences.

	<p>Baker Jane baked _____ cupcakes and sold _____ cupcakes.</p> <p>_____ - _____ = _____</p>
	<p>Baker Jane baked _____ donuts and sold _____ donuts.</p> <p>_____ - _____ = _____</p>
	<p>Baker Jane baked _____ croissants and sold _____ croissants.</p> <p>_____ - _____ = _____</p>
	<p>Baker Jane baked _____ cookies and sold _____ cookies.</p> <p>_____ - _____ = _____</p>

Answers

Baker Jane baked 18 cupcakes and sold 2 cupcakes.

$$18 - 2 = 16$$

Baker Jane baked 12 donuts and sold 4 donuts.

$$12 - 4 = 8$$

Baker Jane baked 15 croissants and sold 3 croissants.

$$15 - 3 = 12$$

Baker Jane baked 12 cookies and sold 6 croissants.

$$12 - 6 = 6$$