

Addition sentences and number lines

Grade 1 Addition Worksheet

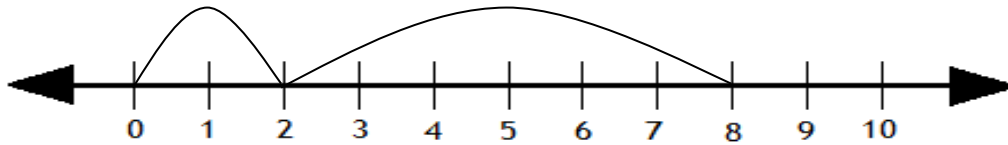
Write the addition sentence using the number line.

Example:



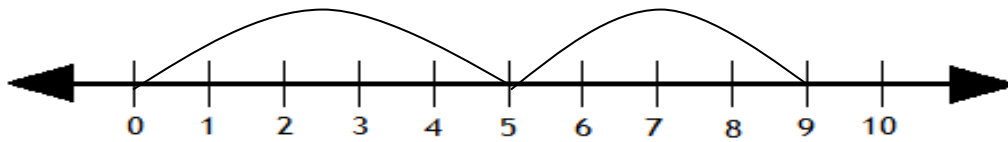
$$\boxed{4} + \boxed{3} = \boxed{7}$$

1.



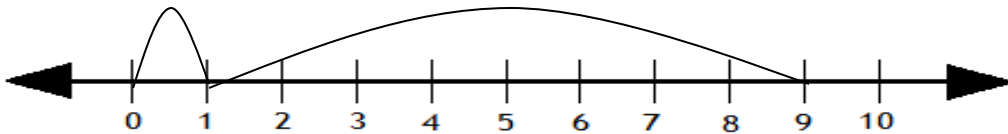
$$\boxed{} + \boxed{} = \boxed{}$$

2.



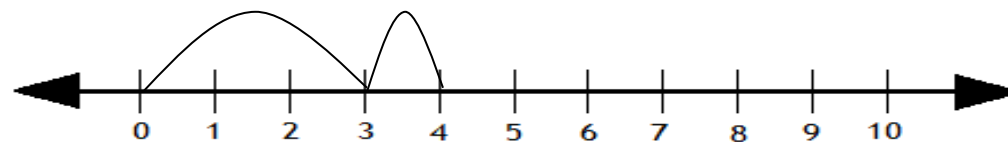
$$\boxed{} + \boxed{} = \boxed{}$$

3.



$$\boxed{} + \boxed{} = \boxed{}$$

4.



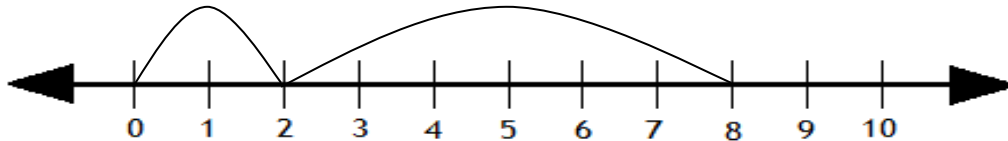
$$\boxed{} + \boxed{} = \boxed{}$$

Addition sentences and number lines

Grade 1 Addition Worksheet

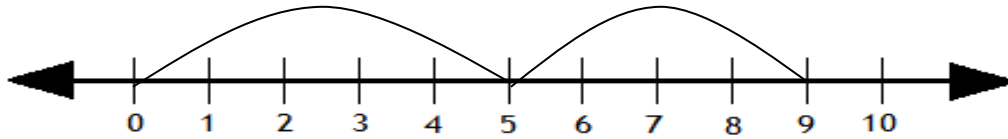
Answers

1.



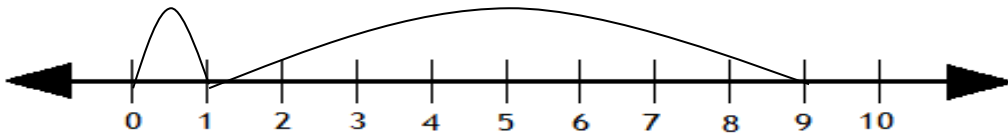
$$2 + 6 = \boxed{8}$$

2.



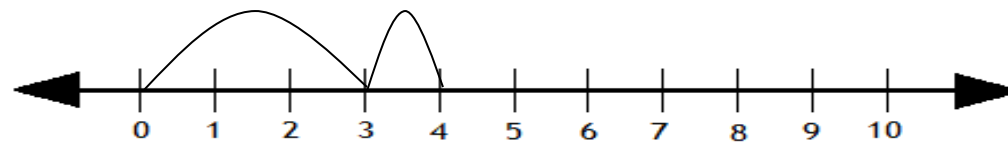
$$5 + 4 = \boxed{9}$$

3.



$$1 + 8 = \boxed{9}$$

4.



$$3 + 1 = \boxed{4}$$